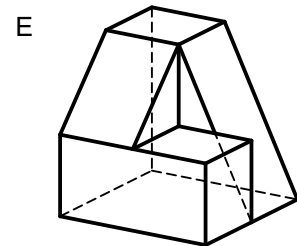
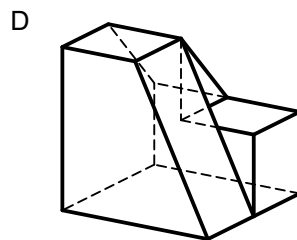
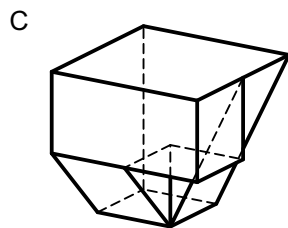
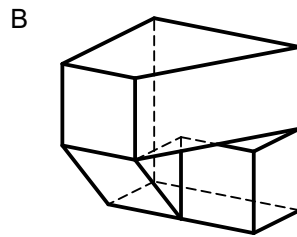
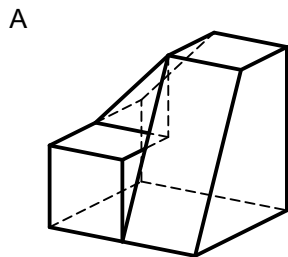
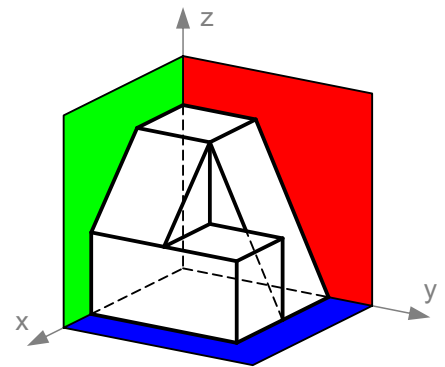


Transformationen erkennen 1

Welche Transformationen werden auf den rechts in einer Raumecke platzierten Körper ausgeübt?

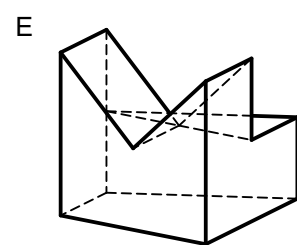
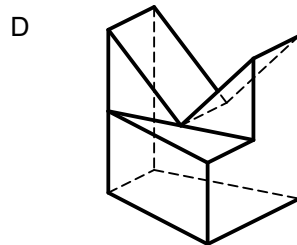
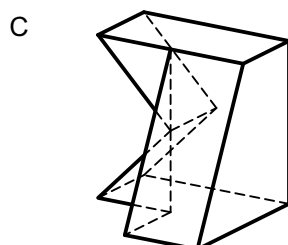
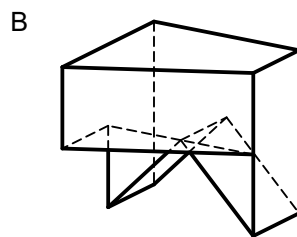
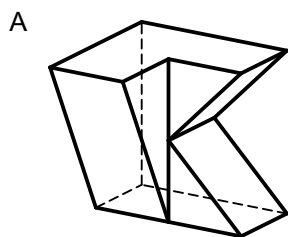
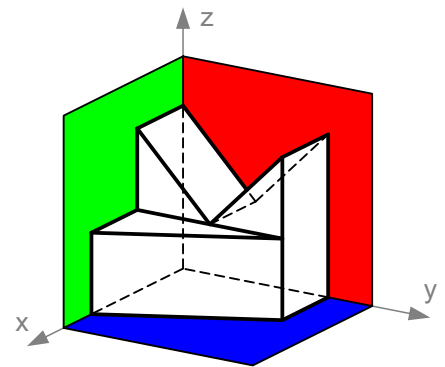


Setze den richtigen Buchstaben ein!

Schiebung	Drehung um			Spiegelung an		
	x-Achse	y-Achse	z-Achse	xy-Ebene	yz-Ebene	zx-Ebene
E		B	A	E	D	

Transformationen erkennen 2

Welche Transformationen werden auf den rechts in einer Raumecke platzierten Körper ausgeübt?



Setze den richtigen Buchstaben ein!

Schiebung	Drehung um			Spiegelung an		
	x-Achse	y-Achse	z-Achse	xy-Ebene	yz-Ebene	zx-Ebene
	A,C		E	B		D